

Linear Motion Review

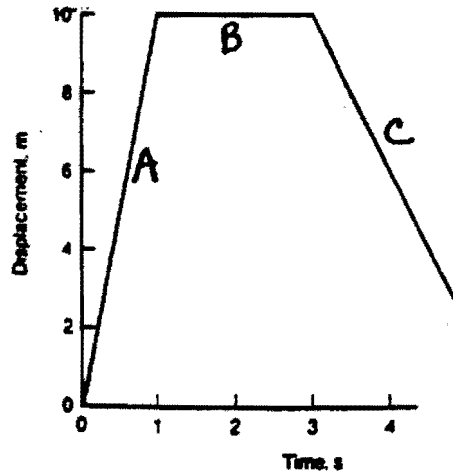
- A 1. On a distance vs. time graph, a straight horizontal line indicates \_\_\_ motion.  
a. no                      b. increasing                      c. decreasing                      d. acceleration
- d 2. On a velocity vs. time graph, a straight diagonal line with an upward slope indicates \_\_\_\_\_.  
a. no motion      b. increasing motion      c. decreasing motion      d. acceleration
- b 3. On a velocity vs. time graph, the motion of a car traveling along a straight road with a uniform acceleration of  $2 \text{ m/s}^2$  would appear as a \_\_\_\_\_.  
a. horizontal straight-line                      b. straight line sloping up to the right  
c. straight line sloping up to the left                      d. curved line whose upwardslope increases with time
- C 4. A bicycle travels 12 km for 40 minutes its average speed is \_\_\_\_ km/hr.  $S = \frac{\Delta d}{\Delta t} = \frac{12}{2/3}$   
a. 0.30                      b. 8.0                      c. 18.0                      d. 48
- C 5. A car travels 40 km/hr for 2.0 hr and 50 km/hr for 1.0 hr and 20 km/hr for 0.5 hr. The cars average speed is \_\_\_\_ km/hr.  $S = \frac{\Delta d}{\Delta t} = \frac{80+50+10}{2+1+.5}$   
a. 31                      b. 45                      c. 40                      d. 55
- A 6. How long does a car with an acceleration of  $2.0 \text{ m/s}^2$  take to go from 10 m/s to 30 m/s?  
a. 10 s                      b. 20 s                      c. 40 s                      d. 400 s      Equation #1
- A 7. A car undergoes a constant acceleration of  $6.0 \text{ m/s}^2$ , starting from rest. In the first second it travels \_\_\_\_ m  
a. 3                      b. 6                      c. 18                      d. 36 m      Equation 3
- C 8. An airplane requires 20 s and 400. m of runway to become airborne, starting from rest. Its velocity when it leaves the ground is \_\_\_\_ m/s.  
a. 20                      b. 32                      c. 40                      d. 80      Equation 2
- d 9. A car has an initial velocity of 15 m/s and an acceleration of  $1.0 \text{ m/s}^2$ . In the first 10 s after the acceleration begins, the car travels \_\_\_\_ m.  
a. 50                      b. 150                      c. 155                      d. 200      Equation 3
- C 10. A car has an initial velocity of 15 m/s and an acceleration of  $-1.0 \text{ m/s}^2$ . In the first 10 s after the acceleration begins, the car travels \_\_\_\_ m.  
a. 25                      b. 50                      c. 100                      d. 145      Equation 3
- A 11. A ball thrown vertically upward at 25 m/s continues to rise for approximately \_\_\_\_ s.  
a. 2.5                      b. 5.0                      c. 7.5                      d. 10

b 12. In question #11, how much time will pass before the ball strikes the ground.

- a. 2.5 s                      b. 5.0 s                      c. 7.5 s                      d. 10 s

Use the graph to the right to answer questions 14 - 17

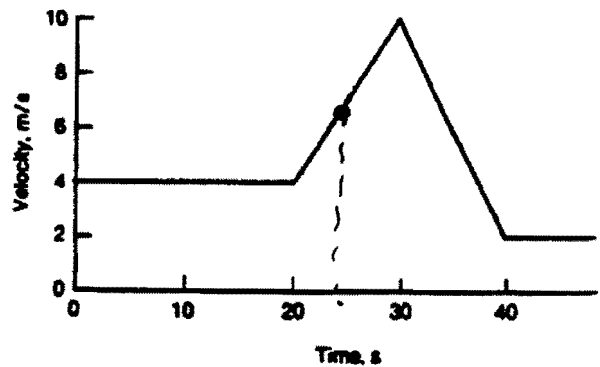
- B 13. Which section indicates the object is not moving?  
C 14. Which section indicates the object is moving back toward the original position?  
A 15. Which section indicates the object is moving forward?  
 \_\_\_ 16. What is the velocity of segment "A"?



$$\frac{10}{1} = 10 \text{ m/s}$$

Use the graph to the right to answer questions 18-19

- \_\_\_ 17. What is the acceleration of the object at 25.0 s?  
 \_\_\_ 18. When does the object turn around and head back?



$$17) V_f - V_i = 10 - 4 = 6 \text{ m/s}$$

$$a = \frac{\Delta V}{\Delta t} = \frac{6}{10} = 0.6 \text{ m/s}^2$$

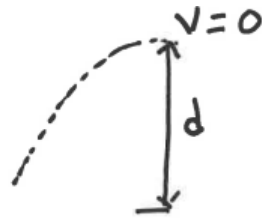
18) Never Velocity is > 0 Everywhere

### Written Problems:

(work on a separate sheet of paper)

1. A batter hits a ball into the air and it takes 9 seconds to return to the ground. How high does the ball go?

Look @ Going  
from The Bottom  
to The Top



TIME TO the top  
=  $\frac{1}{2}$  (Total time)

$$\begin{aligned} V_i &= * \\ V_f &= 0 \text{ @ top} \\ d &= ? \\ a &= -9.8 \\ t &= 9 \div 2 = 4.5 \text{ sec} \end{aligned}$$

$$d = V_f t - \frac{1}{2} a t^2$$

$$d = -\frac{1}{2} (-9.8) (4.5)^2 = 99.2 \text{ m}$$

2. A rocket is shot off at 75 m/s, how long does it take to reach its highest point?

$$V = 0 \text{ @ Top}$$

$$V_i = 75 \text{ m/s}$$

$$V_f = 0$$

$$d = *$$

$$a = -9.8$$

$$t = ?$$

$$V_f = V_i + a t$$

$$0 = 75 - 9.8 t$$

$$9.8 t = 75$$

$$t = 75 / 9.8 = 7.65 \text{ sec}$$

3. A Kangaroo rat can jump as high as 9 feet (2.75 meters), what is its hang time?

$$V = 0 \text{ @ top}$$

$$V_i = * \quad d = V_f t - \frac{1}{2} a t^2$$

$$V_f = 0$$

$$2.75 = -\frac{1}{2} (-9.8) t^2$$

$$d = 2.75$$

$$\frac{2.75}{4.9} = \frac{4.9}{4.9} t^2$$

$$a = -9.8$$

$$t = ?$$

$$t = \sqrt{0.561} = 0.749 \text{ sec}$$

Hang time is 2 x the time to the top = 1.5 seconds

What is its initial velocity?

Find  $V_i$

$$V_f = V_i + at$$

$$0 = V_i - 9.8(7.49)$$

$$V_i = 7.34 \text{ sec}$$

Use a blank sheet of paper to answer the following questions.

Remember for full credit show, Givens – Drawing – Formula – Substitution - Answer

1. a. Explain the difference between instantaneous and average speed.

***Average speed is the speed over a specific range of time while instantaneous speed is a speed at a specific time. Average speed is calculated as total distance traveled divided by the total time. Instantaneous speed is the slope of a line at a specific point.***

- b. What is velocity?

***Velocity is a vector quantity representing the change in distance in a specified amount of time.  $V = \Delta d / \Delta t$***

- c. What is acceleration?

***Acceleration is a vector quantity representing the change in velocity in a specified amount of time.  $a = \Delta v / \Delta t$***

- d. What equation would be used to find the acceleration of something that changes its velocity in some uniform way over a given time interval?

$$a = \Delta v / \Delta t$$

- e. Why would a piece of paper and a tennis ball fall at different rates if dropped in the classroom? How could you get them to fall at the same rate?

***They fall at different rates because air resistance affects the paper more than the ball. You can get them to fall at the same rate by placing them in a vacuum.***

2. a. What is the difference between speed and velocity?

***Speed is a scalar quantity which just means how fast is something going. Velocity is a vector which means it has both size (how fast) and direction. 10 m/s is a scalar, 10 m/s up is a vector. Vectors are used when direction is an important thing to know.***

- b. If you move at a constant speed can you be accelerating? Explain and give an example.

***You can be accelerating if you are moving at a constant speed because your direction could be changing. By changing your direction, you are changing your velocity and acceleration is  $\Delta v / \Delta t$***

3. a. What is the average speed of a driver who accelerates from 10 mph to 82 mph in 4.2 seconds?

$$V_{avg} = \frac{V_f + V_i}{2} = \frac{10 + 82}{2} = 46 \text{ mph}$$

- b. What is his acceleration?

$$a = \frac{\Delta v}{\Delta t} = \frac{82 - 10}{4.2} = \frac{17 \text{ mph}}{\text{sec}}$$

- c. What is the driver's instantaneous speed after 4.2 second?  $V_f = 82 \text{ mph}$

4. a. Ignoring air resistance, if a rock is dropped from a cliff that is 50 m tall, how long would it take to hit the ground?

$$\begin{array}{l} V_i = 0 \\ V_f = * \\ d = 50 \\ a = -9.8 \\ t = t \end{array} \quad \begin{array}{l} d = \frac{1}{2} a t^2 \\ 50 = \frac{1}{2} (9.8) t^2 \\ 50 = 4.9 t^2 \end{array} \quad \begin{array}{l} t^2 = \frac{50}{4.9} = 10.2 \\ t = \sqrt{10.2} = 3.19 \text{ sec} \end{array}$$

- b. How fast would that rock hit the ground?

$$V_f = V_i + a t = 9.8(3.19) = 31.3 \text{ m/s}$$

- c. What acceleration would the rock experience?  $-9.8 \text{ m/s}^2$

5. Ignoring air resistance, if Keith "The Pop-Up King" Moreland hits a baseball straight up at a speed of 45 m/s.

- a. What will be the ball's velocity at the peak of the hit?  $V = 0$

- b. What will be the ball's acceleration at the peak of the hit?  $a = -9.8 \text{ m/s}^2$

- c. What will be the ball's velocity as it hits the ground?  $-45 \text{ m/s}$

- d. how long will the ball be in the air?

$$\begin{array}{l} v_i = 45 \\ v_f = 0 \\ d = * \\ a = -9.8 \\ t = ? \end{array} \quad \begin{array}{l} v_f = v_i + a t \\ 0 = 45 - 9.8 t \\ 9.8 t = 45 \end{array} \quad t = \frac{45}{9.8} = 4.59 \text{ sec}$$

4.59 seconds is the time to the top, you need to multiply by 2 to get the total time:

$$\text{Time} = 4.59 \times 2 = 9.18 \text{ sec.}$$

- e. How high will the ball go?

$$d = \frac{1}{2} a t^2 = \frac{1}{2} (9.8) (4.59)^2 = 103 \text{ m}$$